


Melodiaharjoituksia 2

Kirjoita nuottien alle solmisaationimet
ja päälle sävelnimet


Kirjoita puuttuvat sävelet tyhjiin tahteihin kuulun perusteella

Tehtävä 5



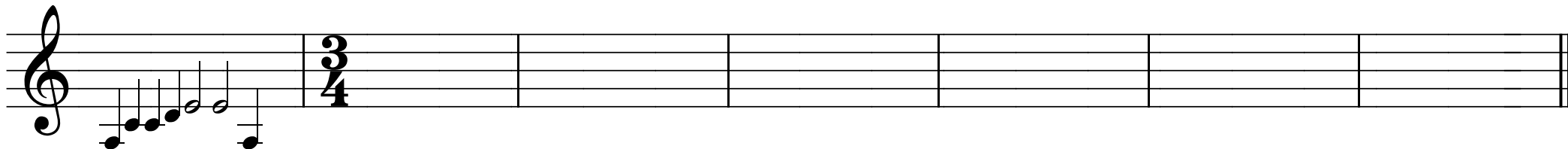
A musical staff in treble clef. The first measure contains a sequence of notes: G4, A4, B4, C5, B4, A4, G4. The second measure contains a 4/4 time signature. The rest of the staff is empty, divided into four measures.

Tehtävä 6



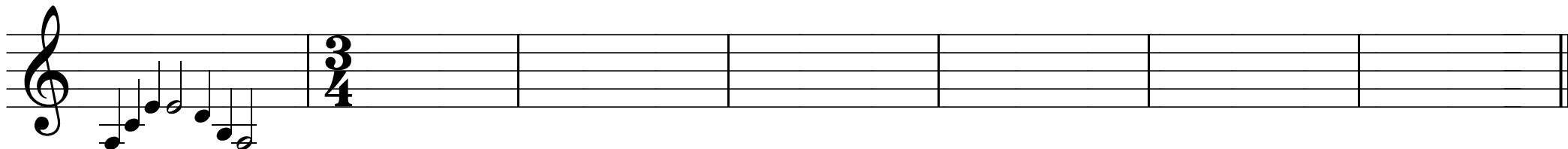
A musical staff in treble clef. The first measure contains a sequence of notes: G4, A4, B4, C5, B4, A4, G4. The second measure contains a 4/4 time signature. The rest of the staff is empty, divided into three measures.

Tehtävä 7



A musical staff in treble clef. The first measure contains a sequence of notes: G4, A4, B4, C5, B4, A4, G4. The second measure contains a 3/4 time signature. The rest of the staff is empty, divided into five measures.

Tehtävä 8



A musical staff in treble clef. The first measure contains a sequence of notes: G4, A4, B4, C5, B4, A4, G4. The second measure contains a 3/4 time signature. The rest of the staff is empty, divided into four measures.