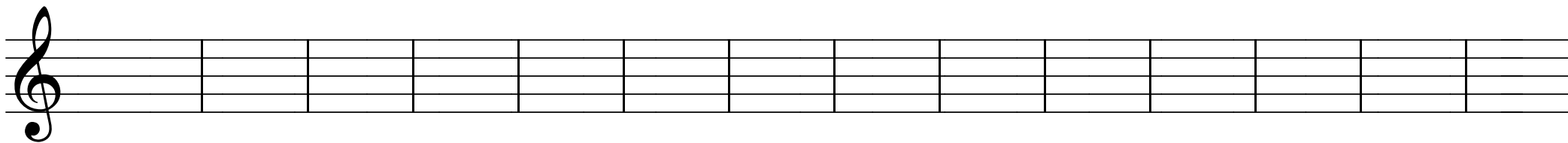



TEHTÄVIÄ 2


Merkitse pyydetty sävel kokonuoteilla viivastolle



a cis¹ h es¹ b ais dis¹ ces¹ eis¹ as des¹ fis¹ ges¹ b



g¹ d¹ f¹ h e¹ c¹ a f¹ h d¹ c¹ e¹ g¹ c¹ a



ais his ces¹ as cis¹ b dis¹ es¹ eis¹ fis fes c ais e¹